

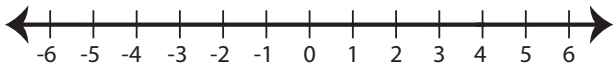
Name : _____

Score : _____

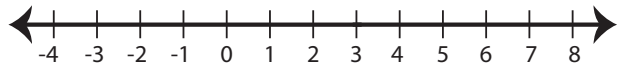
Solving & Graphing Inequalities

Solve each inequality and graph the solution.

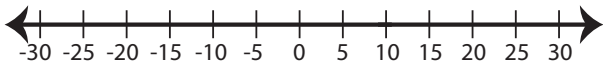
1) $3x - 10 < 2$



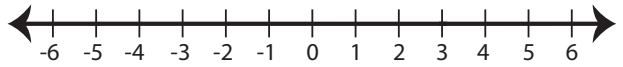
2) $5x + 9 \geq 24$



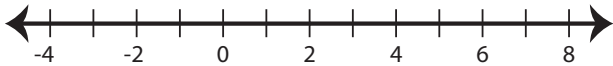
3) $\frac{x-4}{2} > 3$



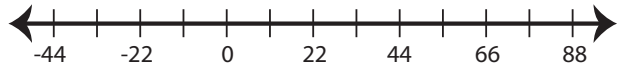
4) $8x - 9 \leq 15$



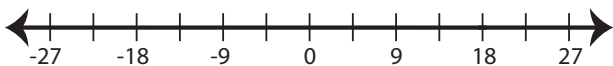
5) $9x - 1 > 17$



6) $\frac{x-3}{9} \geq 7$



7) $\frac{x}{6} + 2 \leq 5$



8) $4 + 2x < 18$

